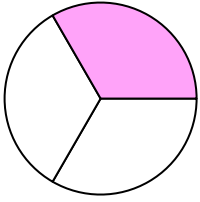


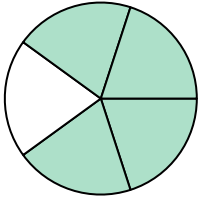


Write the shaded amount in word form.

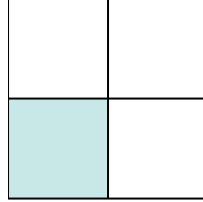
Ex)



1)



2)



**Answers**

Ex. one-third

1. \_\_\_\_\_

2. \_\_\_\_\_

3. \_\_\_\_\_

4. \_\_\_\_\_

5. \_\_\_\_\_

6. \_\_\_\_\_

7. \_\_\_\_\_

8. \_\_\_\_\_

9. \_\_\_\_\_

10. \_\_\_\_\_

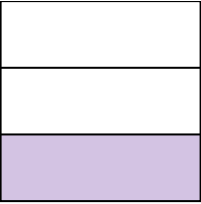
11. \_\_\_\_\_

12. \_\_\_\_\_

13. \_\_\_\_\_

14. \_\_\_\_\_

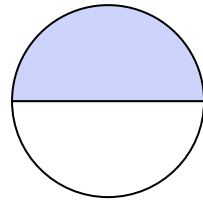
3)



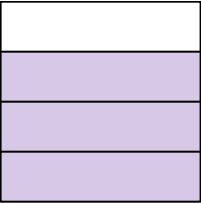
4)



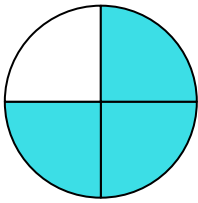
5)



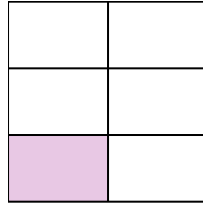
6)




7)



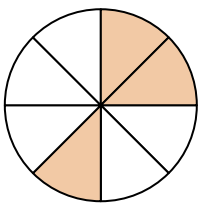
8)




9)



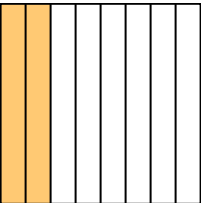
10)



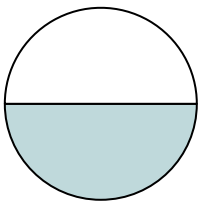
11)




12)



13)



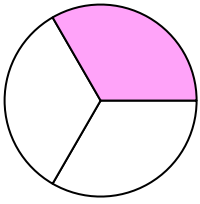
14)



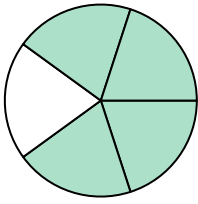


Write the shaded amount in word form.

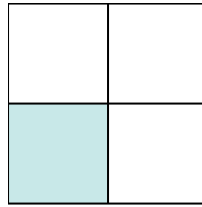
Ex)



1)



2)



Answers

Ex. one-third

1. four-fifths

2. one-third

3. one-third

4. three-fifths

5. one-half

6. three-fourths

7. three-fourths

8. one-fifth

9. six-eighths

10. three-eighths

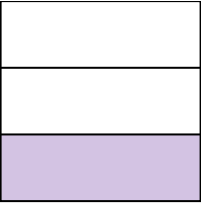
11. one-half

12. two-eighths


13. one-half

14. one-fourth

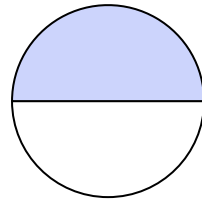
3)



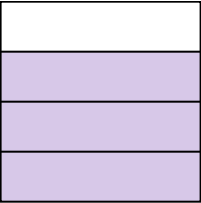
4)



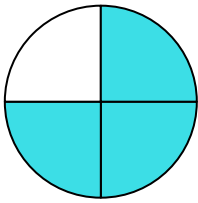
5)



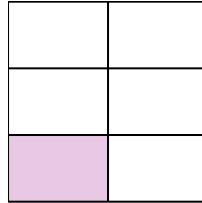
6)




7)



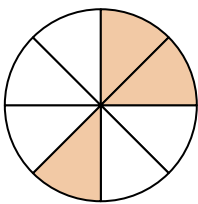
8)




9)



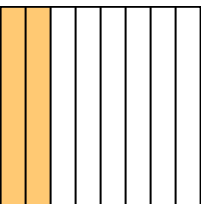
10)



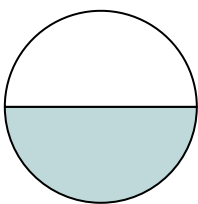
11)



12)



13)



14)

